


VIDYA NIKETAN (BIRLA PUBLIC SCHOOL), PILANI (RAJ.)



BIRLA EDUCATION TRUST, PILANI (RAJASTHAN)
COMMON SCHOLASTIC ASSESSMENT 2019-20

For Admission to Class-VIII

SUBJECTS: HINDI, ENGLISH, MATHEMATICS, INTELLIGENCE TEST

Maximum Time: 2.00 Hours

Maximum Marks: 100

(To be filled in by the candidate)

Name of the Candidate:

Registration No. :

Father's Name:

Studying in Class:

Class in which admission is sought:

Name of Examination Centre:

[For Office Use Only]

1. Invigilator's Signature

2. Signature of Examiner

.....

.....

Hindi	
English	
Mathematics	
I.Q	
TOTAL	

अवधि -30 मिनट

पूर्णांक -25

प्र.1 निम्नलिखित शब्दों को शुद्ध करके लिखिए - 3

द्रश्य _____, आर्शीवाद _____, अनुभुति _____

प्र.2 मूलशब्द तथा उपसर्ग-प्रत्यय अलग करके लिखिए - 3

क- अधिकार _____ + _____

ख - अपमान _____ + _____

ग - दर्शनीय - _____ + _____

प्र.3 दो-दो समानार्थक शब्द लिखिए - 3

क -आभूषण - _____

ख - बादल- _____

ग - पत्ता - _____

प्र.4 विलोम शब्द लिखिए - 3

स्वाधीन - _____, संपत्ति - _____, प्रत्यक्ष - _____

प्र.5 विशेषण बनाइए - 3

पुराण - _____, पढ़ना - _____, अनुभव - _____

प्र.6 रेखांकित पदों के कारक लिखिए - 3

क- गरीबों को मत सताओ - _____

ख- हम कार से चलेंगे - _____

ग- नदी में नाव चल रही है - _____

CLASS VIII
SUBJECT: ENGLISH
SET 1

TIME: 30mins

M.M: 25

Q1. Read the passage given below and answer the questions that follow.

Are You Being Bullied

1. All of a sudden, Anil became quiet and withdrawn. The once confident child began to stammer and his grades dropped; he was distracted in class. He refused to go to school and was disobedient. One night, his mother heard him cry in bed. Nightmares began and the old started to wet the bed.

2. She knew something was wrong. She tried to talk to him. When she persisted he burst out, "That Subhash! He calls me names, he punches and kicks me, spreads rumours about me making people laugh at me. I won't go to school. No."

3. Bullying is persistent unwelcome behaviour, which intends to hurt physically or emotionally. It has become a very common phenomenon breaks the self-esteem, even leaves life-long emotional scars. Tell when they are being bullied; older ones rarely do.

4. Bullying is attention-seeking behaviour. Children see it as a way of being popular, showing off, or making themselves look tough. Some might be jealous of the person they are bullying, or might be victims of bullying themselves. Many do not realize what they are doing is wrong and how it makes their victims feel. They may be witness to bullying behaviour at home or may be acting out their frustrations at home, school, grades, lack of friends, etc. Teachers and parents should see that the bullying child is as much in need of help as their victims.

Rabhika Sounda

1.1 Complete the following statements appropriately:

5 marks

- i. Anil's problem was that he was being _____ by a boy named Subhash.
- ii. Subhash would be troubling Anil by calling him names,
(a) _____, (b) _____ or
putting him down and making people laugh at him.
- iii. Some children who resort to bullying do so to become popular
_____ or because of nurturing
jealousy for the one whom they are bullying.

iv. Sometimes, bullying may be the result of frustrations at

1.2 Answer the following questions briefly:

3 marks

i. What changes came in Anil's behaviour as a result of being bullied?

ii. What can be the harmful effects of being bullied?

iii. What is the author's suggestion to the teachers?

1.3 Find words from the passage opposite in meaning to:

2 marks

i. attracted (Para 1-2)

ii. noisy (Para 1-2)

Q2. Complete the following sentences using an appropriate verb form.

4 marks

a) He _____ before I _____ his place. (leave, reach)

b) I _____ to quit my job. (decide)

c) I will never _____ what you just _____ me. (forget, tell)

d) I _____ my exercise when Hari came to see me. (do)

Q3. Rearrange the following words and phrases to form meaningful sentences.

4 marks

(a) the leisure hours/ of a child/ of the TV/ today/ are spent/ in front

(b) of most/ now-a-days /the attitude /parents is/ different

MATHEMATICS

CLASS: VIII

Time: 30 min

SET-1

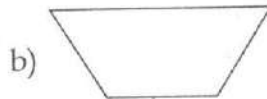
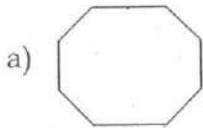
MM: 25

Section A

Answer any five from the given seven questions.

(5x2=10)

1. Draw the lines of symmetry in the given figure



2. Solve:

a) $3\frac{1}{5} + 1\frac{2}{3} =$

b) $2\frac{3}{5} \times \frac{7}{9} =$

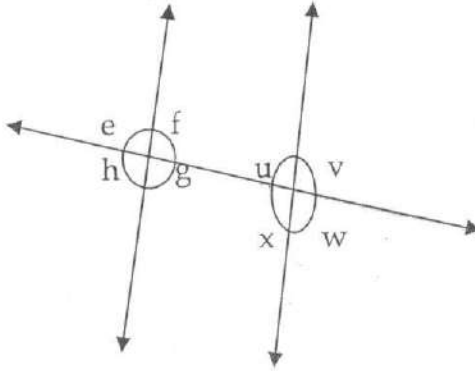
3. 16% children of a class of 25 like to eat ice-cream in winter. How many children like to eat ice-cream in winter?

4. Solve both sides and then put the sign $>$, $<$, $=$ in the box given.

$39 + (-21) - 15$ $49 + (-30) - (-12)$

5. Two angles of a triangle are 30° and 80° . Find the third angle.

12. From the figure find
- a pair of angles that form alternate interior angles
 - a pair of vertically opposite angles
 - a pair of corresponding angles



13. Simply:-

a) $a + b - 3 + b - a + 3 + a - b + 3 =$

b) $p - (p - q) - q - (q - p) =$

14. Solve :

i) $(3^0 + 2^0) \times 5^0 =$

ii) Express 108×192 as the product of prime factors only in exponential form.

Class: VIII

Subject: Intelligence Test

Set 1

M.M:25

Time: 30 min

I. Tick the correct answer

1. Which of these diseases is not caused by improper disposal of sewage?

- A. Cholera B. Heart Attack C. Jaundice D. Typhoid

2. Which one of the five is least like the other four?

- A. Dog B. Mouse C. Lion D. Snake E. Elephant

3. Which number should come next in the series?

1 - 1 - 2 - 3 - 5 - 8 - 13

- A.8 B.13 C.21 D. 26 E.31

4. Mary, who is sixteen years old, is four times as old as her brother. How old will Mary be when she is twice as old as her brother?

- A.20 B.24 C.25 D.26 E.28

5. Which one of the numbers does not belong in the following series?

2 - 3 - 6 - 7 - 8 - 14 - 15 - 30

- A.THREE B.SEVEN C.EIGHT D.FIFTEEN E.THIRTY

6. Finger is to Hand as Leaf is to:

- A. Twig B. Tree C. Branch D. Blossom E. Bark

7. Choose the number that is $\frac{1}{4}$ of $\frac{1}{2}$ of $\frac{1}{5}$ of 200:

- A.2 B.5 C.10 D.25 E.50

8. Choose the word most similar to "Trustworthy":

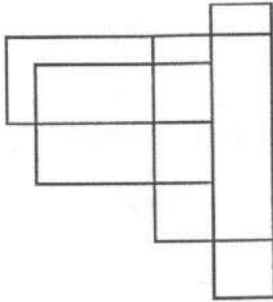
- A. Resolute B. Tenacity C. Relevant D. Insolent E. Reliable

9. Which one of the numbers does not belong in the following series?

1 - 2 - 5 - 10 - 13 - 26 - 29 - 48

- A.1 B.5 C.26 D.29 E.48

10. How many four-sided figures appear in the diagram below?



A.10

B.16

C.22

D.25

E.28

11. Which one of the following things is the least like the others?

A. Poem

B. Novel

C. Painting

D. Statue

E. Flower

12. Nadia will survey 50 students in her town to find out what their favorite summertime activity is. Which group would likely give the Best representation for her survey?

A.50 students at a library

B.50 students in her school

C.50 students at a shopping mall

D.50 students taking swimming lessons

13. It is highly likely that Malika will randomly select the letter A from a group of letters. From which group of letters could Malika be selecting?

A. A, E, I, O, U

B. A, B, C, A, D

C. A, F, A, G, A, H

D. A, A, J, A, A, K

14. Sun Temple is situated at?

A. Konark

B. Bangalore

C. Haridwar

D. Kerala

15. 'Gita Govinda' is written by

A. Valmiki

B. Jaya Dev

C. Tulsidas

D. Sharan Gupta

II. Find the odd man out.

16. 3, 5, 11, 14, 17, 21

A.21

B.17

C.14

D.3

17. 6, 9, 15, 21, 24, 28, 30

- A. 28
- B. 21
- C. 24
- D. 30

18. 1, 4, 9, 16, 23, 25, 36

- A. 9
- B. 23
- C. 25
- D. 36

19. Pick the odd one out

- A. Tiger
- B. Cow
- C. Lion
- D. Wolf

20. Pick the odd one out

- A. Volleyball
- B. Football
- C. Baseball
- D. Chess

21. Pick the odd one out.

- A) 2 : 4
- B) 5 : 25
- C) 10 : 100
- D) 3 : 9
- E) 6 : 60

22. Pick the odd one out.

- A) Beautiful – Ugly
- B) Praise – Blame
- C) Nice – Good
- D) Beginning – Conclusion
- E) Fat – Thin

III. Fill in the blanks.

23. It is very cold at night. I need a When I sleep.

- A. Belt
- B. Hat
- C. Blanket
- D. Shoes

24. Dede has an uncle. The son of his uncle is

- A. Father
- B. Nephew
- C. Grandfather
- D. Cousin

25. ! the street is slippery.

- A. Be careful
- B. Be quiet
- C. Be nice
- D. Be diligent
